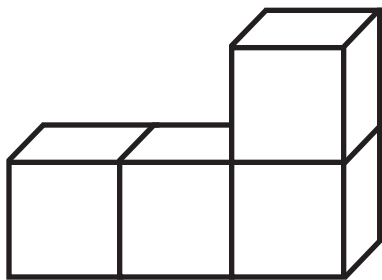

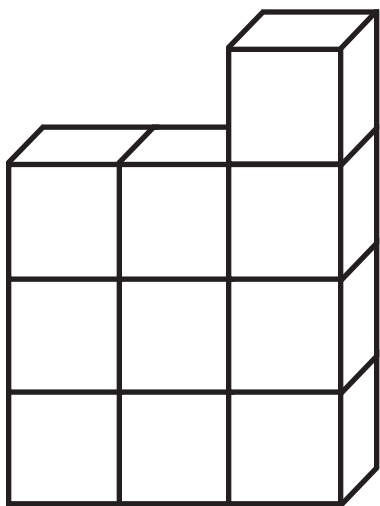


Piles of Cubes I**Pile 1****Pile 2****Pile 3**

Pile Number	Number of Cubes
1	4
2	7
3	10
4	
5	
10	

Things I want to remember: