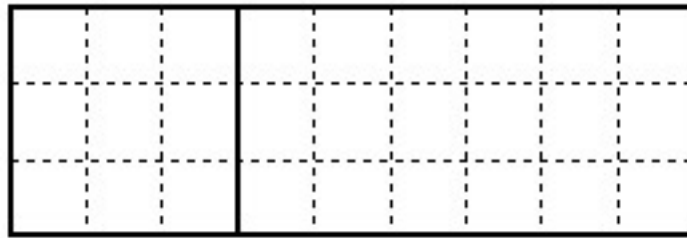
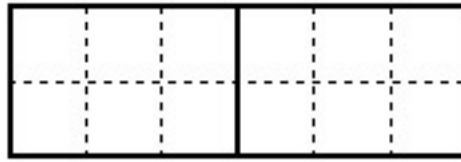
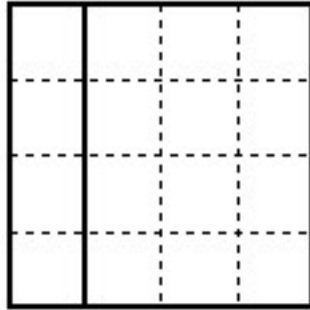


**Geometric Representations of Arithmetical Operations**

Write the corresponding distributive equalities for the following rectangles.



Use tiles or a grid to illustrate the following identities:

$$(5 + 3) \times 3 = 5 \times 3 + 3 \times 3$$

$$(10 + 2) \times 3 = 10 \times 3 + 2 \times 3$$